
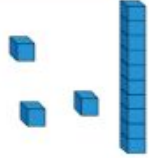


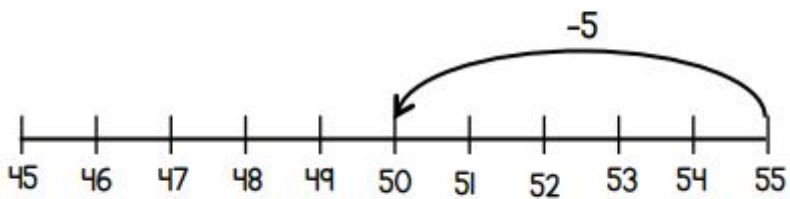
Subtraction

Complete the missing boxes.

10 less	Number	10 more
		
	fifteen	twenty-five

Amir is working out $55 - 8 =$

He uses a number line.



Complete Amir's method.

Ben has **63** beads.

He gives **37** beads away.

How many beads does Ben have **left**?

Sam has 55p.

Ben has 10p less than Sam.


Tick the coins that **Ben** has.



There are **100g** of chocolate chips in the bag.

Sita uses **25g**.

Ben uses **35g**.



How many grams of chocolate chips are **left** in the bag?

Write two numbers that are **greater than 20** to make this subtraction correct.

$$\square - \square = 2$$