


Mental Maths

Summer 2 Week 6

Revision/Recap

1) Write or draw one thing you do before school.



2) How much?



3) Which is smaller 62 or 26?

4) What is double 8?



Let's try some true or false questions to
recap our learning from the year.


True or False ?

Count in 10s



There are 40 cakes.

True



There are 4 groups of 10 cakes.

4 groups of 10 is equal to 40

True or False ?

Numbers to 50



There are 32 muffins.

False



There are 23 muffins.

True or False?

Recognise and name 3-d shapes

This is a cube.

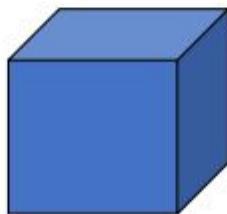


False

This is a cuboid.



All of the faces of a cube are square.



Now try to work your way through the
Maths activity booklet.

You don't need to finish it all this
week!