


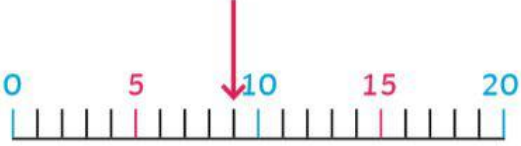




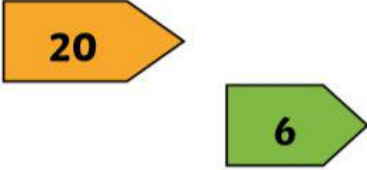










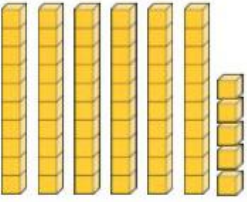


Place Value - Worksheet 1

Write the numerals that are represented here.

							
							
<table border="1" data-bbox="272 788 624 981"> <thead> <tr> <th>tens</th> <th>ones</th> </tr> </thead> <tbody> <tr> <td></td> <td></td> </tr> </tbody> </table>	tens	ones					
tens	ones						
							
		<table border="1" data-bbox="927 1025 1281 1216"> <thead> <tr> <th>tens</th> <th>ones</th> </tr> </thead> <tbody> <tr> <td></td> <td></td> </tr> </tbody> </table>	tens	ones			
tens	ones						
							
							

Complete the number tracks.

a) 

67	68			71			
----	----	--	--	----	--	--	--

b) 

89			92				
----	--	--	----	--	--	--	--

c) 

			97	96		94	
--	--	--	----	----	--	----	--