





Thursday - Subtraction - Please make sure you have objects available to help your child work out the answers.

Please note - If your child find subtracting higher than 10 challenging, please only complete the subtraction problems up to 10.


If you had 10 glass bottles and 3 of them smashed, how many of them would you have left?



If you had 5 ice cubes and 2 of them melted, how many would you have left?




If you had 10 currant buns and 8 of them have been eaten, how many of them would you have left?




$$\square - \square = \square$$

If you had 5 books and you have read 3 of them, how many would you have left?




$$\square - \square = \square$$

If you had 10 sausages in a pack and you have cooked 4 of them, how many sausages would you have left in the packet?



$$\square - \square = \square$$

If you had 20 jelly beans and you have eaten 6 of them, how many would you have left?



$$\square - \square = \square$$

If you had 20 milk cartons and drink 2 of them, how many would you have left?



$$\square - \square = \square$$

If you had 20 plums and you use 13 to make jam, how many would you have left?




$$\square - \square = \square$$

If you had 5 fish fingers in a box and you cooked 4 of them, how many fish fingers would you have left in the box?



<div style="border: 1px solid black; width: 150px; height: 100px; margin: 10px;"></div>	-	<div style="border: 1px solid black; width: 150px; height: 100px; margin: 10px;"></div>	=	<div style="border: 1px solid black; width: 150px; height: 100px; margin: 10px;"></div>
---	---	---	---	---

If you had 5 birds in your garden and 1 of them flew away, how many birds would you have left?



<div style="border: 1px solid black; width: 150px; height: 100px; margin: 10px;"></div>	-	<div style="border: 1px solid black; width: 150px; height: 100px; margin: 10px;"></div>	=	<div style="border: 1px solid black; width: 150px; height: 100px; margin: 10px;"></div>
---	---	---	---	---